



INTERNATIONAL CATS CONTESTS

COMPETENCE & APTITUDE TESTING SERVICES

FASTEST GROWING CONTESTS IN PAKISTAN



QUESTION BOOKLET



**ICATS
IT CONTEST
2019**

**GRADE 1 & 2
(TODDLERS)**

Time Allowed: 75 Mins
Maximum Marks: 60

ICATS IT CONTEST 2019 TODDLERS (GRADE 1 & 2)

TIME ALLOWED : 75 MINUTES

MAXIMUM MARKS : 60

TOTAL QUESTIONS : 20 MCQS

INSTRUCTIONS

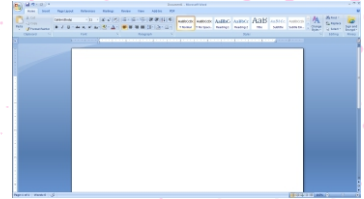
1. DON'T START ATTEMPTING THE PAPER UNTIL INSTRUCTED BY THE INVIGILATORS.
2. INSTRUCTIONS FROM THE EXAMINATION INVIGILATORS MUST BE CARRIED OUT PROMPTLY.
3. CAREFULLY RECHECK YOUR NAME, FATHER NAME, SCHOOL NAME, ADDRESS ETC AT THE BUBBLE SHEET / ANSWERSHEET.
4. RECORD ALL ANSWERS ON THE BUBBLE SHEET ONLY. SELECT BEST ANSWER FROM THE FOUR GIVEN OPTIONS AND MARK ONLY ONE OPTION IN EACH QUESTION.
5. USE BLUE / BLACK INK TO FILL UP THE CIRCLES FOR YOUR ANSWERS ON THE BUBBLE SHEET. USE OF LEAD PENCIL IS NOT ALLOWED.
6. USE OF ANY HELPING MATERIAL INCLUDING CELL PHONES AND ELECTRONIC DEVICES IS STRICTLY PROHIBITED.
7. EVERY CORRECT ANSWER EARNS THREE POINTS. THERE WOULD BE NEGATIVE MARKING. ONE POINT WOULD BE DEDUCTED FOR EVERY INCORRECT ANSWER.
8. CANDIDATES MAY NOT LEAVE THE EXAMINATION ROOM UNESCORTED FOR ANY REASON, AND THIS INCLUDES USING THE WASHROOM.
9. NO MATERIALS OR ELECTRONIC DEVICES SHALL BE BROUGHT INTO THE ROOM.
10. THERE ARE FIVE CATEGORIES OF THE CONTEST AS UNDER:
 - A. TODDLERS (GRADE 1 & 2)
 - B. KIDS (GRADE 3 & 4)
 - C. JUNIORS (GRADE 5 & 6)
 - D. JUVENILES (GRADE 7 & 8)
 - E. ADOLESCENTS (GRADE 9 & 10 / O-LEVELS)
11. ONLY REGISTERED STUDENTS CAN PARTICIPATE IN THE CONTEST.
12. NO CANDIDATE SHALL TAKE OUT OF THE HALL ANY ANSWER BOOK(S) OR PART OF AN ANSWER BOOK, WHETHER USED OR UNUSED, OR OTHER SUPPLIED MATERIAL.
13. IF A PARTICIPANT DOES NOT UNDERSTAND A WORD OR PHRASE ON THE EXAM PAPER, NEITHER EXAMINER NOR INVIGILATOR IS PERMITTED TO ANSWER.
14. FOR INFORMATION ABOUT UPCOMING CONTESTS OR PROVIDING VALUABLE FEEDBACK, PLEASE VISIT WWW.CATSCONTESTS.ORG
15. ANY ACADEMIC MISCONDUCT OR MALPRACTICE MUST BE REPORTED TO INTERNATIONAL CATS CONTESTS AT INFO@CATSCONTESTS.ORG

Q1. Identify which of the following is software:

A



C



B



D



Q2. _____ is now used by many people to represent all paper documents, including letters, books, print advertisements, catalogs, memos, order forms, and so on.

A | Hardware

B | Software

C | Hard Copy

D | Soft Copy

Q3. As thousands of files are stored inside a computer, it is very important to keep them organized. I am an object that can hold multiple files or documents. On the computer screen, most often I look like a yellow or blue paper file folder. I keep files organized by grouping them together. What am I?

A | A file

B | A directory

C | A hard drive

D | A print out

Q4. Which of the following moves the pointer to another location on-screen?

A | Pressing the arrow keys on the keyboard.

B | Moving the mouse until the pointer points to that spot.

C | Moving the mouse until the pointer points to that spot and clicking the left mouse button.

D | Moving the mouse until the pointer points to that spot and clicking the right mouse button.

Q5. I am the brain of a computer. My picture is given below. Who am I?



A | CD ROM

B | Hard Drive

C | Central Processing Unit

D | RAM

Q6. Generally speaking, which of the following storage devices can hold the most information?

A | A hard disk

B | A Zip disk

C | A CD-ROM

D | A DVD

Q7. I am a storage device but I can store information **TEMPORARILY**. Whenever you work with a file on your computer, you're using me. And the data in that file is temporarily stored in me for processing as long as the computer has power. Can you recognize me? Who am I?

A



C



B



D



Q8. Which of the following is a text-based operating system?

A | Windows 95

B | Windows 2000

C | Windows CE

D | MS-DOS

Q9. In the mouse shown below, which button will you press for right-click?

A | Red button

C | Yellow button

B | Blue button

D | Both, red and blue buttons



Q10. Can you identify the place / activity of the following where computer CANNOT be used?

A



C



B



D



Q11. The equivalent of a left mouse click on a touch-screen is...?

A | Touch the screen and hold the finger on.

C | Tap the item twice on the screen

B | Tap the screen and release.

D | Slide the finger on the screen

Q12. Which of the following is like a music file:

A



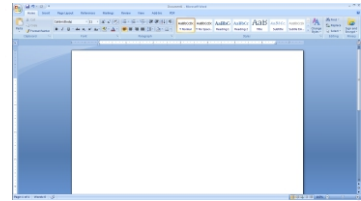
C



B



D



Q13. Maya's teacher brought some new software, which is shown below. Where in the computer will she put this in order to run the new software?



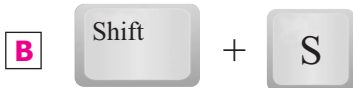
A | Hard drive

B | CD-ROM drive


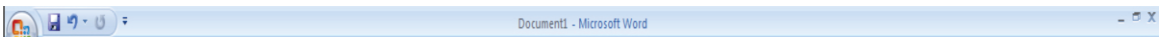
C | Memory

D | Cursor

Q14. Ali wants to save his MS Word document. Which shortcut keys he should use?



Q15. The bar of MS Word document shown in the image below is called:



Q16. Minimizing a window is helpful if you are not using the program temporarily, but plans to return to it soon. To maximize a window, which button of the following will you simply click on?



Q17. How can you select more than one icon at a time?

- A** | Select the first, then hold CTRL whilst selecting the rest
- B** | Right click on them
- C** | Double click on them
- D** | Use the TAB button

Q18. The following icon will enable you to:



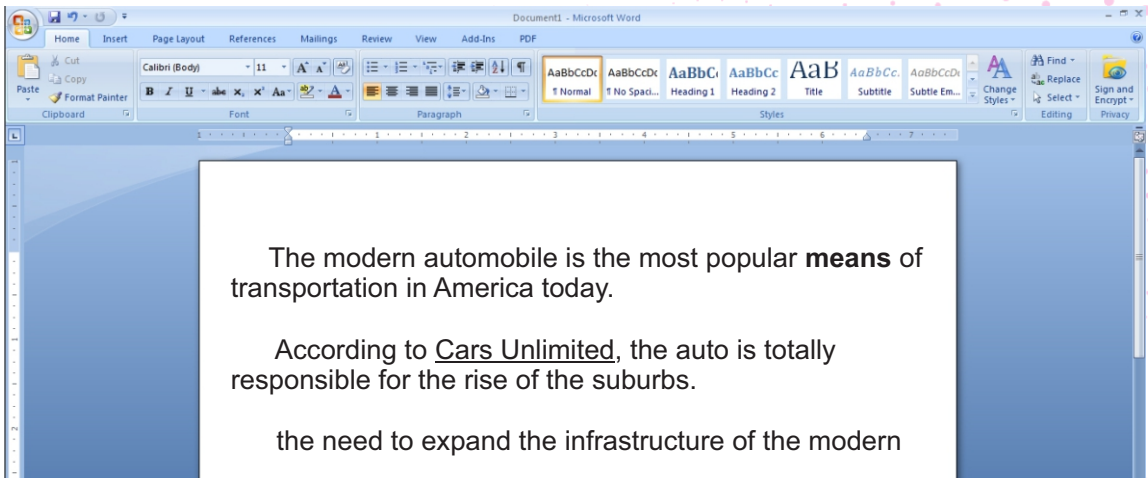
- A** | Copy text
- B** | Paste text
- C** | Create a folder
- D** | Open new document

Q19. The following icon will enable you to:



- A** | Insert bullets
- B** | Change case
- C** | Increase font size
- D** | Decrease font size

Q20. See the following MS Word document made by Sara and answer the question given below.



Which button did Sara use to make the style change to the word “means” in the first paragraph?

A



C



B



D



ICATS English Linguistics Contest 2019

National Toppers

Student Name	Father Name	Grade	School	City
AMATULLAH	ADNAN	1	MSB EDUCATIONAL INSTITUTE	KARACHI
MUHAMMAD MOHSIN	WAHEED SHEHZAD	1	RANGERS PUBLIC SCHOOL FOR BOYS	LAHORE
ZAIN-UL-ABIDIN	INAM-ULLAH	2	ARMY PUBLIC SCHOOL GARRISON JUNIOR	LAHORE
MUHAMMAD ASIS JAVED	MUHAMMAD SHAHEER JAVED	3	THE CITY SCHOOL CHASHMA BRANCH	MIANWALI
AYESHA SIDDIQUI	M. ASHRAF UL KABIR SIDDIQUI	4	THE CITY SCHOOL GULSHAN JUNIOR CAMPUS	KARACHI
AYESHA FAISAL	FAISAL EHSAN	5	LAHORE GRAMMAR SCHOOL LANDMARK PROJECT	LAHORE
ASAD IMRAN	M. IMRAN	6	THE CITY SCHOOL CANTT CAMPUS II	QUETTA
MANAAL TARIQ	DR. TARIQ MEHMOOD	7	THE CITY SCHOOL GIRLS CAMPUS	SIALKOT
FIZZA RIZVI	ALI ABBAS RIZVI	8	HABIB GIRLS SCHOOL	KARACHI
LAMISAH BEHRAM KHAN	BEHRAM BASHIR KHAN	9	LAHORE GRAMMAR SCHOOL	ISLAMABAD
FAIZ UL HASSAN GILANI	GHULAM UL HUSSAIN GILANI	10	THE CITY SCHOOL TOWN SENIOR SECTION	PESHAWAR

ICATS Mathematics Contest 2019

National Toppers

Student Name	Father Name	Grade	School	City
HIBA MALIK	BILAL MALIK	1	KOHSAR CHILDREN'S ACADEMY	MANSEHRA
DURYAB ZAHRA	MUHAMMAD RASHID	1	BEACONHOUSE HAFIZABAD	HAFIZABAD
ABDUL RASHEED	ABDUL WAHEED	2	ARMY PUBLIC SHOOOL & COLLEGE SYSTEM SADDAR CAMPUS	KARACHI
BURHANUDDIN	M. ALI ASGHER SAMIWALA	2	MSB EDUCATIONAL INSTITUTE	KARACHI
M. HUMMAS	M. SHAKIL	3	DEFENCE HOUSING AUTHORITY COLLEGE AND SCHOOL SYSTEM	KARACHI
EHAN QURESHI	ASSADULLAH QURESHI	4	FFC GRAMMAR SCHOOL AND COLLEGE	MIRPUR MATHELO
MAHAD ABID	M. HARIIS UMER	5	THE CITY SCHOOL CHENAB CAMPUS	FAISALABAD
UROOJ AJMAL	AJMAL IBRAHIM	6	KIPS SCHOOL	LAHORE
MUHAMMAD SALAMAT	SADAT MEHMOOD	7	GARRISON ACADEMY TUFAIL SHAHEED CAMPUS (SENIOR)	LAHORE
ABDULLAH JUNAID KHAN	ABDUL RAUF	8	THE SCIENCE SCHOOL	ISLAMABAD
SAAD ALI HASSAN	ABDUL HAYEE	8	THE SCIENCE SCHOOL	RAWALPINDI
DANIYAL KALEEM SHEIKH	MUHAMMAD KALEEM	9	ROOTS IVY INTERNATIONAL SCHOOL IB CAMPUS	RAWALPINDI
AHMED ALI	AUN ALI	10	MSB EDUCATIONAL INSTITUTE	KARACHI

COMPETE if you are
the **BEST**